

Classwork

Domain & Range of Graphs

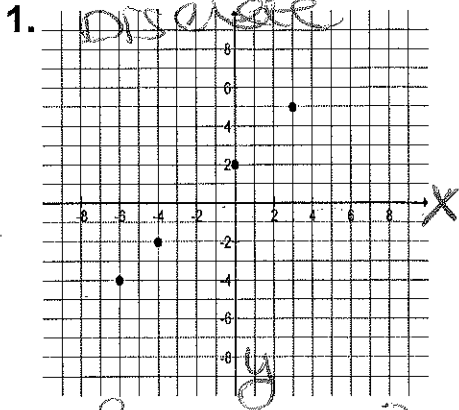
Name: _____

Period: _____

Key

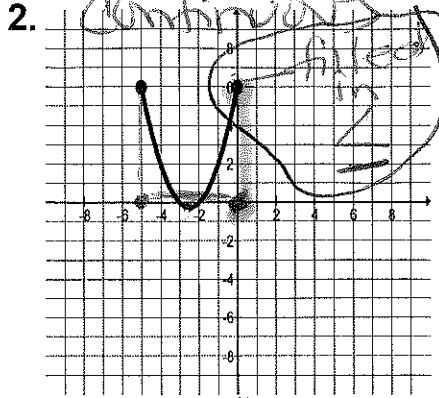
Date: 9/23/13

Find the domain and range of the following graphs.



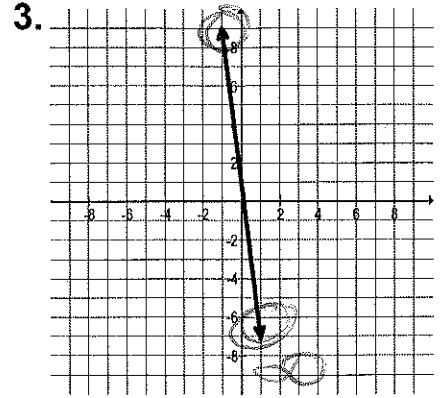
D: $\{-4, -2, 2, 5\}$

R: $\{-6, -4, 0, 3\}$



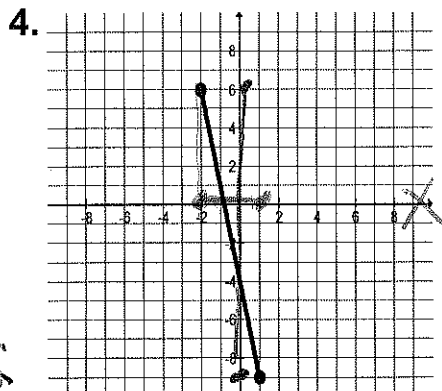
D: $-5 \leq x \leq 0$

R: $0 \leq y \leq 6$



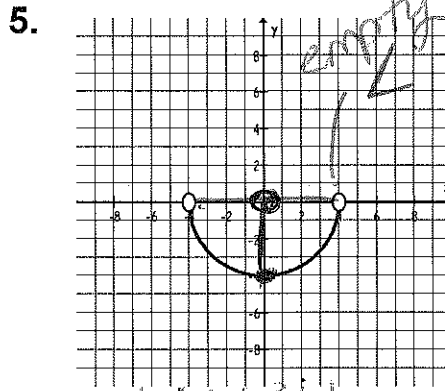
D: TR All real numbers

R: TR All real numbers



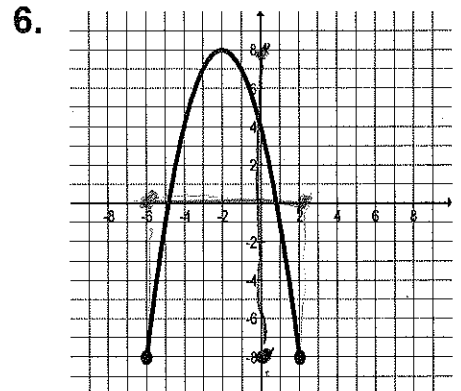
D: $-2 \leq x \leq 1$

R: $-9 \leq y \leq 6$



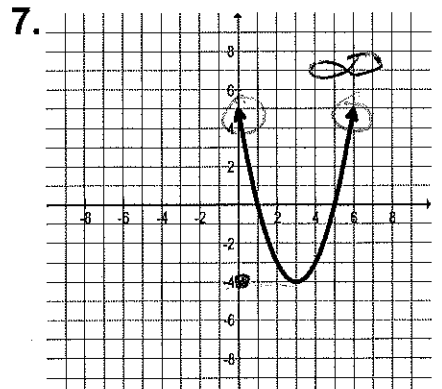
D: $-4 < x < 4$

R: $-4 \leq y < 0$



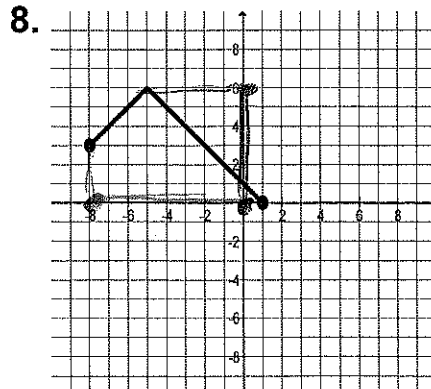
D: $-6 \leq x \leq 2$

R: $-8 \leq y \leq 6$



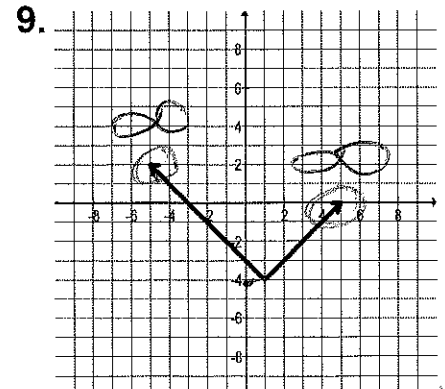
D: TR All real numbers

R: $-4 \leq y < \infty$



D: $-8 \leq x \leq 1$

R: $0 \leq y \leq 6$



D: TR All real numbers

R: $-4 \leq y < \infty$